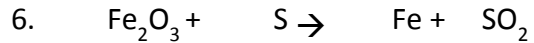
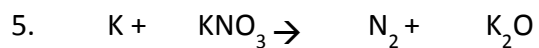
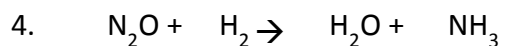
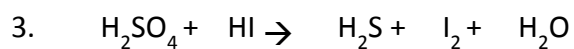
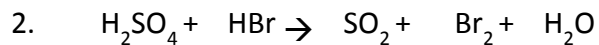
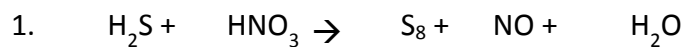


Name _____

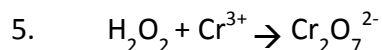
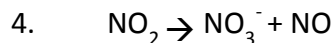
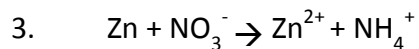
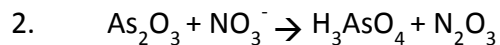
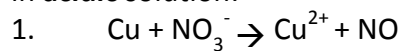
SCH4U-5-2D Balancing Redox Reactions Practice Activity

Part A: Balance the following equations using Oxidation Numbers Method. **Underline the oxidizing agent and circle the reducing agent**



Name _____

Part B: Balance the following equations using the Half-Reaction method for reactions occurring in **acidic** solution:



Part C: Balance the following equations using the Ion-Electron Method for reactions occurring in **basic** solution

